

# NEET (UG)-2020

Q.1 Which of the following statement is not true about acid rain?

- (1) It is due to reaction  $\text{SO}_2$ ,  $\text{NO}_2$  and  $\text{CO}_2$  with rain water
- (2) Causes no damage to monuments like Taj Mahal
- (3) It is harmful for plants
- (4) Its pH is less than 5.6

Ans: (2)

Sol: Acid rain causes to damage to monuments like Tajmahal.

Q.2 The oxidation number of the underlined atom in the following species

- (1)  $\text{Cu}_2\underline{\text{O}}$  is  $-1$
- (2)  $\underline{\text{Cl}}\text{O}_3^-$  is  $+5$
- (3)  $\text{K}_2\underline{\text{Cr}}_2\text{O}_7$  is  $+6$
- (4)  $\underline{\text{H}}\text{AuCl}_4$  is  $+3$

Identify the incorrect option.

Ans: (1)

Sol: Ox. State of "O" in  $\text{Cu}_2\text{O} = -2$

Ox. State of "Cl" in  $\text{ClO}_3^- = +5$

Ox. State of "Cr" in  $\text{K}_2\text{Cr}_2\text{O}_7 = +3$

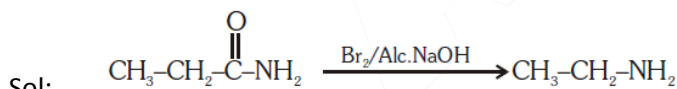
Ox. State of "Au" in  $\text{HAuCl}_4 = +3$

$\therefore$  (1) is incorrect

Q.3 Reaction of propenamide with ethanolic sodium hydroxide and bromine will give

- (1) Ethylamine
- (2) Methylamine
- (3) Propylamine
- (4) Aniline

Ans: (1)



Hoffmann bromamide degradation reaction.

Q.4 A liquid compound (x) can be purified by steam distillation only if it is

- (1) Steam volatile, immiscible with water
- (2) Not steam volatile, miscible with water
- (3) Steam volatile, miscible with water
- (4) Not steam volatile, immiscible with water

Ans: (1)

Sol: Compounds purified by steam distillation which are immiscible in water but steam volatile.

Q.5 Among the compounds shown below which one revealed a linear structure?

- (1)  $\text{NO}_2$
- (2)  $\text{HOCl}$
- (3)  $\text{O}_3$
- (4)  $\text{N}_2\text{O}$

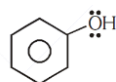
Ans: (4)

Sol:  $:\text{N}\equiv\text{N}\rightarrow\ddot{\text{O}}:$  (Linear)

Q.6 Which of the following compounds is most reactive in electrophilic aromatic substitution?



Ans: (4)




Phenol

Sol:

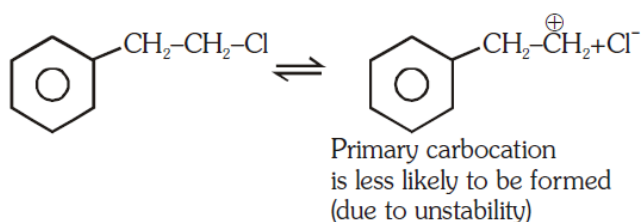
+R effect of -OH group enhances the reactivity in aromatic electrophilic substitution reaction.

Q.7 Which of the following will not undergo  $S_N1$  reaction with  $\bar{O}H$ ?



Ans: (1)

Sol: Reactivity in case of  $S_N1$  reaction depends upon formation of carbocation.



Q.8 Which of the following is not true about chloramphenicol ?

- (1) It inhibits the growth of only gram positive bacteria.  
 (2) It is a broad spectrum antibiotic.  
 (3) It is not bactericidal.  
 (4) It is bacteriostatic.

Ans: (1)

Sol: Chloramphenicol is a broad spectrum antibiotic which can inhibit the growth of gram positive bacteria and gram negative bacteria

Q.9 Which of the following statement is correct about Bakelite ?

- (1) It is a cross linked polymer.      (2) It is an addition polymer.  
 (3) It is a branched chain polymer.      (4) It is a linear polymer.

Ans: (1)

Sol: Bakelite is an example of cross-linked polymer

Q.10 If for a certain reaction  $\Delta_rH$  is  $30 \text{ kJ mol}^{-1}$  at  $450 \text{ K}$ , the value of  $\Delta_rS$  (in  $\text{JK}^{-1}\text{mol}^{-1}$ ) for which the same reaction will be spontaneous at the same temperature is

- (1) 70      (2) -33      (3) 33      (4) -70

Ans: (1)

Sol:  $\Delta G = \Delta H - T\Delta S$

For spontaneous,

$$\Delta G < 0$$

$$\Delta H - T\Delta S < 0$$

$$\Delta S > \frac{\Delta H}{T}$$

$$\Delta S > \frac{30 \times 10^3 \text{ J mol}^{-1}}{450 \text{ K}}$$

$$\Delta S > 66.6 \text{ J mol}^{-1} \text{ K}^{-1} \text{ (Check buy options)}$$

Q.11 Match the element in column I with that in column II.

Column-I	Column-II
(a) Copper	(i) Non-metal
(b) Fluorine	(ii) Transition metal
(c) Silicon	(iii) Lanthanoid
(d) Cerium	(iv) Metalloid

Identify the correct match :

- (1) (a)-(ii), (b)-(iv), (c)-(i), (d)-(iii)                      (2) (a)-(ii), (b)-(i), (c)-(iv), (d)-(iii)  
(3) (a)-(iv), (b)-(iii), (c)-(i), (d)-(ii)                      (4) (a)-(i), (b)-(ii), (c)-(iii), (d)-(iv)

Ans: (2)

Sol: Copper – Transition metal

Fluorine – Non metal

Silicon – Metalloids

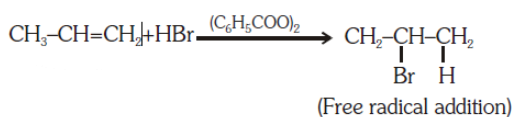
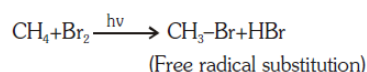
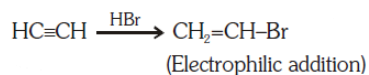
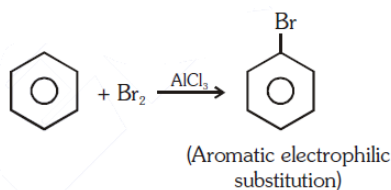
Cerium – Lanthanoid

Q.12 Which of the following is a free radical substitution reaction ?

- (1) Benzene with  $\text{Br}_2/\text{AlCl}_3$     (2) Acetylene with HBr  
(3) Methane with  $\text{Br}_2/h\nu$     (4) Propene with  $\text{HBr}/(\text{C}_6\text{H}_5\text{COO})_2$

Ans (3)

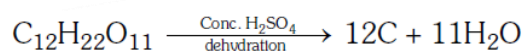
Sol:



Q.13 The reaction of concentrated sulphuric acid with carbohydrates ( $\text{C}_{12}\text{H}_{22}\text{O}_{11}$ ) is an example of

- (1) Dehydration                      (2) Oxidation                      (3) Reduction                      (4) Sulphonation

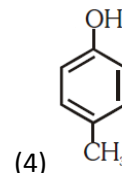
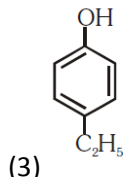
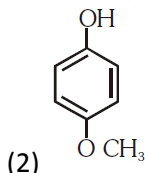
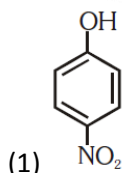
Ans: (1)



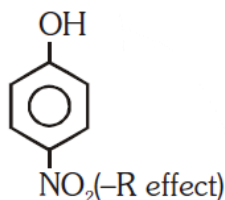
Sol:

Black

Q.14 Which of the following substituted phenols is the strongest acid ?



Ans: (1)



Sol:

- NO<sub>2</sub> group is electron withdrawing group. Which increases the acidic strength of phenol.

Q.15 Match the compounds of Xe in column I with the molecular structure in column II.

Column-I

Column-II

(a) XeF<sub>2</sub>

(i) Square planar

(b) XeF<sub>4</sub>

(ii) Linear

(c) XeO<sub>3</sub>

(iii) Square pyramidal

(d) XeOF<sub>4</sub>

(iv) Pyramidal

(1) (a)-(ii) (b)-(i) (c)-(iii) (d)-(iv)

(2) (a)-(ii) (b)-(iv) (c)-(iii) (d)-(i)

(3) (a)-(ii) (b)-(iii) (c)-(i) (d)-(iv)

(4) (a)-(ii) (b)-(i) (c)-(iv) (d)-(iii)

Ans: (4)

Sol: XeF<sub>2</sub> → Linear

XeF<sub>4</sub> → Square planar

XeO<sub>3</sub> → Pyramidal

XeOF<sub>4</sub> → Square pyramidal

Q.16 The half-life for a zero order reaction having 0.02 M initial concentration of reactant is 100 s. The rate constant (in mol L<sup>-1</sup> s<sup>-1</sup>) for the reaction is

(1) 1.0 × 10<sup>-4</sup>

(2) 2.0 × 10<sup>-4</sup>

(3) 2.0 × 10<sup>-3</sup>

(4) 1.0 × 10<sup>-2</sup>

Ans: (1)

Sol:  $(t_{1/2})_{zero} = \frac{[A]_0}{2K}$

$$100s = \frac{0.02M}{2K}$$

$$K = \frac{0.02M}{2 \times 100} = 1 \times 10^{-4} mol L^{-1} s^{-1}$$

Q.17 Identify the incorrect statement from the following:

- (1) Zirconium and Hafnium have identical radii of 160 pm and 159 pm, respectively as a consequence of lanthanoid contraction.
- (2) Lanthanoids reveal only +3 oxidation state.
- (3) The lanthanoid ions other than the f<sub>0</sub> type and the f<sub>14</sub> type are all paramagnetic.
- (4) The overall decrease in atomic and ionic radii from lanthanum to lutetium is called lanthanoid contraction.

Ans: (2)

Sol: Lanthanoids shows general oxidation state +3 but some elements can shows +2 as well as +4.

Q.18 18. Match the following aspects with the respective metal.

Aspect	Metal
(a) The metal which reveals a maximum number of oxidation states	(i) Scandium
(b) The metal although placed in 3d block is considered not as a transition element	(ii) Copper
(c) The metal which does not exhibit variable oxidation states	(iii) Manganese
(d) The metal which in +1 oxidation state in aqueous solution undergoes disproportionation	(iv) Zinc

Select the correct option :

- (1) (a)-(i) (b)-(iv) (c)-(ii) (d)-(iii)                      (2) (a)-(iii) (b)-(iv) (c)-(i) (d)-(ii)  
 (3) (a)-(iii) (b)-(i) (c)-(iv) (d)-(ii)                      (4) (a)-(ii) (b)-(iv) (c)-(i) (d)-(iii)

Ans: (2)

Sol: In the given options

The metal which reveals a maximum number of oxidation state → Mn

The metal although placed in 3d block is considered not as a transition element is → Zn

The metal which does not exhibit variable oxidation state is → Sc (only +3)

The metal which in +1 oxidation state in aqueous solution undergoes disproportionation is → Cu

Q.19 19. If 8g of a non-electrolyte solute is dissolved in 114 g of n-octane to reduce its vapour pressure to 80%, the molar mass (in g mol<sup>-1</sup>) of the solute is [Given that molar mass of n-octane is 114 g mol<sup>-1</sup>]

- (1) 40                      (2) 60                      (3) 80                      (4) 20

Ans: (1)

Sol: Assuming dilute solution,

$$\frac{P_0 - P_s}{P_s} \approx \frac{P_0 - P_s}{P_0} = \frac{n_{\text{solute}}}{n_{\text{solvent}}}$$

Let P<sub>0</sub> = 100, V.P reduced to 80%, ∴ P<sub>s</sub> = 80

$$\frac{100 - 80}{80} = \frac{8/m}{114/114}$$

Q.20 Match the coordination number and type of hybridisation with distribution of hybrid orbitals in space based on Valence bond theory.

Coordination number and type of hybridization	Distribution of hybrid orbitals in space
(a) 4, sp <sup>3</sup>	(i) trigonal bipyramidal
(b) 4, dsp <sup>2</sup>	(ii) octahedral
(c) 5, sp <sup>3</sup> d	(iii) tetrahedral
(d) 6, d <sup>2</sup> sp <sup>3</sup>	(iv) square planar

Select the correct option :

- (1) (a)-(ii) (b)-(iii) (c)-(iv) (d)-(i)                      (2) (a)-(iii) (b)-(iv) (c)-(i) (d)-(ii)  
 (3) (a)-(iv) (b)-(i) (c)-(ii) (d)-(iii)                      (4) (a)-(iii) (b)-(i) (c)-(iv) (d)-(ii)

Ans: (2)

Sol: sp<sup>3</sup> – tetrahedral, dsp<sup>2</sup> - square planar, sp<sup>3</sup>d – trigonal bipyramidal, d<sup>2</sup>sp<sup>3</sup>-octahedral

Q.21 The number of angular nodes and radial nodes in 3s orbital are

- (1) 0 and 2, respectively                      (2) 1 and 0, respectively

(3) 3 and 0, respectively

(4) 0 and 1, respectively

Ans: (1)

Sol: No. of angular nodes =  $\ell$

No. of Radial nodes =  $n - \ell - 1$

For 3s ;  $n = 3$  and  $\ell = 0$

$\therefore$  No. of angular nodes = 0

$\therefore$  No. of radial nodes = 2

Q.22 Identify the correct statement from the following.

(1) The order of hydration enthalpies of alkaline earth cations



(2) Lithium and Magnesium show some similarities in their physical properties as they are diagonally placed in periodic table.

(3) Lithium is softer among all alkali metals.

(4) Lithium chloride is deliquescent and crystallises as a hydrate,  $\text{LiCl} \cdot \text{H}_2\text{O}$ .

Ans: (2)

Sol: Li & Mg shows diagonal relationship that's why they shows similarity in their physical properties.

Q.23 Deficiency of which vitamin causes osteomalacia ?

(1) Vitamin A

(2) Vitamin D

(3) Vitamin K

(4) Vitamin E

Ans: (2)

Sol: Deficiency of vitamin D causes osteomalacia (soft bones and joint pain in adults)

Q.24 Identify the wrongly matched pair.

**Molecule**                      **Shape or geometry of molecule**

(1)  $\text{PCl}_5$                               Trigonal planar

(2)  $\text{SF}_6$                                 Octahedral

(3)  $\text{BeCl}_2$                                 Linear

(4)  $\text{NH}_3$                                  Trigonal pyramidal

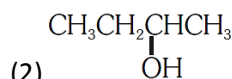
Ans: (1)

Sol:  $\text{PCl}_5$  - Trigonal bipyramidal

Q.25  $\text{CH}_3\text{CH}_2\text{CH} = \text{CH}_2 \xrightarrow[\text{H}_2\text{O}, \text{H}_2\text{O}_2, \text{OH}^-]{\text{B}_2\text{H}_6} \text{Z}$  What is Z?

(1)  $\text{CH}_3\text{CH}_2\text{CH}_2\text{CH}_2\text{OH}$

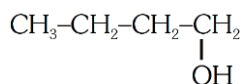
(3)  $\text{CH}_3\text{CH}_2\text{CH}_2\text{CHO}$



(4)  $\text{CH}_3\text{CH}_2\text{CH}_2\text{CH}_3$

Ans: (1)

Sol:  $\text{CH}_3 - \text{CH}_2 - \text{CH} = \text{CH}_2 \xrightarrow[\text{2. H}_2\text{O}, \text{H}_2\text{O}_2, \text{OH}^-]{\text{1. BH}_3 \cdot \text{THF}}$



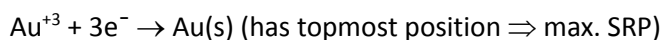
(Hydroboration-oxidation)

Q.26 Identify the reaction from following having top position in EMF series (Std. red. potential) according to their electrode potential at 298 K.

(1)  $\text{Mg}^{2+} + 2\text{e}^- \rightarrow \text{Mg(s)}$  (2)  $\text{Fe}^{2+} + 2\text{e}^- \rightarrow \text{Fe(s)}$  (3)  $\text{Au}^{3+} + 3\text{e}^- \rightarrow \text{Au(s)}$  (4)  $\text{K}^+ + \text{e}^- \rightarrow \text{K(s)}$

Ans: (3)

Sol: According to electrode potential series,



Q.27 Match the elements in Column I with methods of purification in Column II.

**Column I**

**Column II**

(a) Boron

(i) Van Arkel method

(b) Tin

(ii) Mond's process

(c) Zirconium

(iii) Liquation

(d) Nickel

(iv) Zone refining

(1) (a)-(iv) (b)-(iii) (c)-(i) (d)-(ii)

(2) (a)-(iv) (b)-(iii) (c)-(ii) (d)-(i)

(3) (a)-(ii) (b)-(i) (c)-(iv) (d)-(iii)

(4) (a)-(iii) (b)-(iv) (c)-(i) (d)-(ii)

Ans: (1)

Sol: B - Purified by Zone Refining

Sn - Liquation

Zr - Van arkel method

Ni - Mond's process

Q.28 Which among the following salt solutions is basic in nature ?

(1) Ammonium chloride

(2) Ammonium sulphate

(3) Ammonium nitrate

(4) Sodium acetate

Ans: (4)

Sol:  $\text{CH}_3\text{COONa} \Rightarrow$  Salt of  $\text{CH}_3\text{COOH}$ (WA) +  $\text{NaOH}$  (SB)

$\therefore$  Solution of  $\text{CH}_3\text{COONa}$  shows basic nature.

Q.29 In which of the sols, the colloidal particles are with negative charge ?

(1)  $\text{TiO}_2$

(2) Haemoglobin

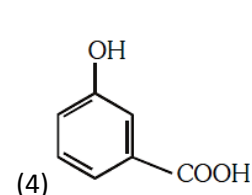
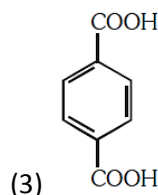
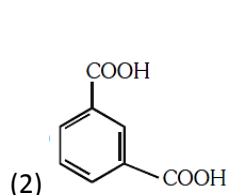
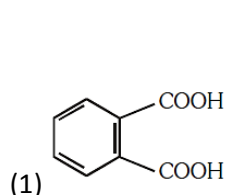
(3) Starch

(4) Hydrated  $\text{Al}_2\text{O}_3$

Ans: (3)

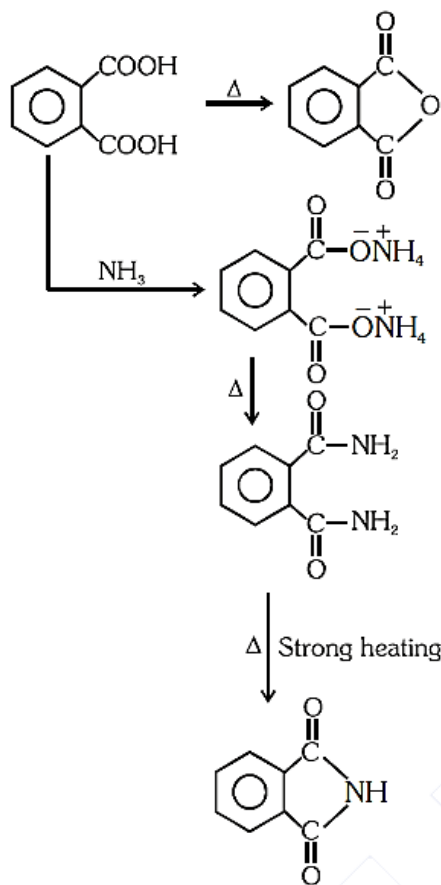
Sol: Starch is example of negative Sol.

Q.30 Which of the following acid will form an (a) Anhydride on heating and (b) Acid imide on strong heating with ammonia ?



Ans: (1)

Sol:



Q.31 In a typical fuel cell, the reactants (R) and product (P) are :-

- (1)  $\text{R} = \text{H}_{2(\text{g})}, \text{O}_{2(\text{g})}; \text{P} = \text{H}_2\text{O}_2(\ell)$
- (2)  $\text{R} = \text{H}_{2(\text{g})}, \text{O}_{2(\text{g})}; \text{P} = \text{H}_2\text{O}(\ell)$
- (3)  $\text{R} = \text{H}_{2(\text{g})}, \text{O}_{2(\text{g})}, \text{Cl}_{2(\text{g})}; \text{P} = \text{HClO}_{4(\text{aq})}$
- (4)  $\text{R} = \text{H}_{2(\text{g})}, \text{N}_{2(\text{g})}; \text{P} = \text{NH}_{3(\text{aq})}$

Ans: (2)

Sol: In typical fuel cell

Reactants =  $\text{H}_2, \text{O}_2$

Products =  $\text{H}_2\text{O}$

Q.32 In collision theory of chemical reaction, ZAB represents

- (1) the fraction of molecules with energies greater than  $E_a$
- (2) the collision frequency of reactants, A and B
- (3) steric factor
- (4) the fraction of molecules with energies equal to  $E_a$

Ans: (2)

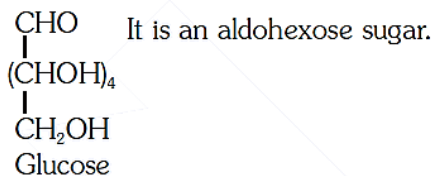
Sol:  $Z_{AB}$  = Collision frequency

Q.33 Which of the following statement is not true about glucose ?

- (1) It is an aldohexose.
- (2) It contains five hydroxyl groups.
- (3) It is a reducing sugar.
- (4) It is an aldopentose.

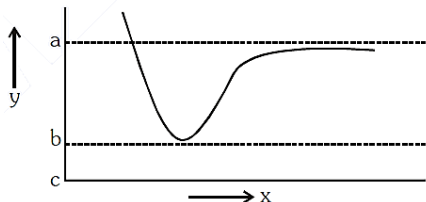
Ans: (4)





Sol: Glucose

Q.34 The potential energy (y) curve for H<sub>2</sub> formation as a function of internuclear distance (x) of the H atoms is shown below.



The bond energy of H<sub>2</sub> is :

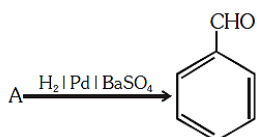
- (1) (b - a)                      (2)  $\frac{(c-a)}{2}$                       (3)  $\frac{(b-a)}{2}$                       (4) (c - a)

Ans: (1)

Sol: As per the given curve bond energy is the amount of energy is released during the bond formation is

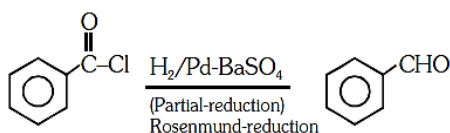
$$\begin{aligned}
 \text{i.e.} &= \text{Final} - \text{Initial} \\
 &= b - a
 \end{aligned}$$

Q.35 Identify compound (A) in the following reaction :



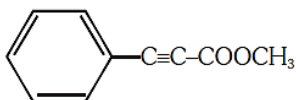
- (1) Benzoyl chloride      (2) Toluene                      (3) Acetophenone                      (4) Benzoic acid

Ans: (1)



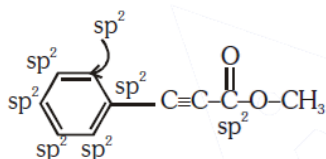
Sol:

Q.36 How many (i) sp<sup>2</sup> hybridised carbon atoms and (ii) π bonds are present in the following compound ?



- (1) 7, 5                      (2) 8, 6                      (3) 7, 6                      (4) 8, 5

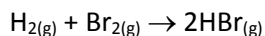
Ans: (3)



Sol:

7-sp<sup>2</sup> carbons, 6π bonds

Q.37 At standard conditions, if the change in the enthalpy for the following reaction is -109 kJ mol<sup>-1</sup>



Given that bond energy of  $\text{H}_2$  and  $\text{Br}_2$  is  $435 \text{ kJ mol}^{-1}$  and  $192 \text{ kJ mol}^{-1}$ , respectively, what is the bond energy (in  $\text{kJ mol}^{-1}$ ) of  $\text{HBr}$ ?

- (1) 368                      (2) 736                      (3) 518                      (4) 259

Ans: (1)

Sol:  $\Delta H = \sum(\text{B.E.})_{\text{Reactants}} - \sum(\text{B.E.})_{\text{Products}}$

$$-109 = [\text{B.E.}_{(\text{H-H})} + \text{B.E.}_{(\text{Br-Br})}] - [2 \times \text{B.E.}_{(\text{H-Br})}]$$

$$-109 = 435 + 192 - 2 \times \text{B.E.}_{(\text{H-Br})}$$

$$\text{B.E.}_{(\text{H-Br})} = \frac{435 + 192 + 109}{2} = 368 \text{ KJ/mol}$$

Q.38 The minimum pressure required to compress  $600 \text{ dm}^3$  of a gas at 1 bar to  $150 \text{ dm}^3$  at  $40^\circ\text{C}$  is

- (1) 4.0 bar                      (2) 0.2 bar                      (3) 1.0 bar                      (4) 2.5 bar

Ans: (1)

Sol: By Boyle's law

$$P_1V_1 = P_2V_2$$

$$1 \text{ bar} \times 600\text{dm}^3 = P_2 \times 150 \text{ dm}^3$$

$$P_2 = 4 \text{ bar}$$

Q.39 What is the role of gypsum,  $\text{CaSO}_4 \cdot 2\text{H}_2\text{O}$  in setting of cement ? Identify the correct option from the following :

- (1) to fasten the setting process  
 (2) to provide water molecules for hydration process  
 (3) to help to remove water molecules  
 (4) to slow down the setting process

Ans: (4)

Sol: The purpose of adding gypsum is only to slow down the process of setting of cement so that it gets sufficiently hardened

Q.40 Which of the following oxide is amphoteric in nature?

- (1)  $\text{SnO}_2$                       (2)  $\text{SiO}_2$                       (3)  $\text{GeO}_2$                       (4)  $\text{CO}_2$

Ans: (1)

Sol:  $\text{SnO}_2$  - amphoteric

Q.41 Which one of the following reactions does not come under hydrolysis type reaction ?

- (1)  $\text{SiCl}_{4(l)} + 2\text{H}_2\text{O}_{(l)} \rightarrow \text{SiO}_{2(s)} + 4\text{HCl}_{(aq)}$                       (2)  $\text{Li}_3\text{N}_{(s)} + 3\text{H}_2\text{O}_{(l)} \rightarrow \text{NH}_{3(g)} + 3\text{LiOH}_{(aq)}$   
 (3)  $2\text{F}_{2(g)} + 2\text{H}_2\text{O}_{(l)} \rightarrow 4\text{HF}_{(aq)} + \text{O}_{2(g)}$                       (4)  $\text{P}_4\text{O}_{10(s)} + 6\text{H}_2\text{O}_{(l)} \rightarrow 4\text{H}_3\text{PO}_{4(aq)}$

Ans: (3)

Sol:  $2\text{F}_{2(g)} + 2\text{H}_2\text{O}_{(l)} \xrightarrow{\frac{3}{4}} 4\text{HF}_{(aq)} + \text{O}_{2(g)}$

It's a type of Redox reaction.

Q.42 Which one of the following compounds shows both, Frenkel as well as Schottky defects ?

- (1)  $\text{AgBr}$                       (2)  $\text{AgI}$                       (3)  $\text{NaCl}$                       (4)  $\text{ZnS}$

Ans: (1)

Sol:  $\text{AgBr}$  shows both schottky and frenkel defect

Q.43 One mole of carbon atom weighs 12 g, the number of atoms in it is equal to, (Mass of carbon – 12 is  $1.9926 \times 10^{-23}$  g)

- (1)  $1.2 \times 10^{23}$                       (2)  $6.022 \times 10^{22}$                       (3)  $12 \times 10^{22}$                       (4)  $6.022 \times 10^{23}$

Ans: (4)

Sol: 1 mole of carbon =  $6.022 \times 10^{23}$  atoms

Q.44 Isotonic solutions have same

- (1) vapour pressure    (2) freezing temperature  
(3) osmotic pressure    (4) boiling temperature

Ans: (3)

Sol: Isotonic solutions have same osmotic pressure.

Q.45 The solubility product for a salt of the type AB is  $4 \times 10^{-8}$ . What is the molarity of its standard solution?

- (1)  $2 \times 10^{-4}$  mol/L                      (2)  $16 \times 10^{-16}$  mol/L                      (3)  $2 \times 10^{-16}$  mol/L                      (4)  $4 \times 10^{-4}$  mol/L

Ans: (1)

Sol:  $K_{sp}$  for AB =  $s^2 = 4 \times 10^{-8}$

$$\begin{aligned} \therefore \text{Molarity of solution} &= \text{solubility} \sqrt{K_{sp}} \\ &= \sqrt{4 \times 10^{-8}} \\ &= 2 \times 10^{-4} \text{ mol/L} \end{aligned}$$

Q.46 In some plants thalamus contributes to fruit formation. Such fruits are termed as :

- (1) False fruits                      (2) Aggregate fruits                      (3) True fruits                      (4) Parthenocarpic fruit

Ans: (1)

Sol:

Q.47 First discovered restriction endonuclease that always cuts DNA molecule at a particular point by recognising a specific sequence of six base pairs is:

- (1) EcoR1    (2) Adenosine deaminase  
(3) Thermostable DNA polymerase                      (4) Hind II

Ans: (4)

Sol:

Q.48 Which of the following statements is incorrect?

- (1) Biomass decreases from first to fourth trophic level  
(2) Energy content gradually increases from first to fourth trophic level  
(3) Number of individuals decreases from first trophic level to fourth trophic level  
(4) Energy content gradually decreases from first to fourth trophic level

Ans: (2)

Sol:

Q.49 The term 'Nuclein' for the genetic material was used by :

- (1) Franklin                      (2) Meischer                      (3) Chargaff                      (4) Mendel

Ans: (2)

Sol:

- Q.50 Chromosomal theory of inheritance was proposed by :  
 (1) Sutton and Boveri (2) Bateson and Punnett (3) T. H. Morgan (4) Watson and Crick  
 Ans: (1)  
 Sol:
- Q.51 Phycoerythrin is the major pigment in :  
 (1) Red algae (2) Blue green algae (3) Green algae (4) Brown algae  
 Ans: (1)  
 Sol:
- Q.52 Identify the statement which is incorrect.  
 (1) Sulphur is an integral part of cysteine.  
 (2) Glycine is an example of lipids.  
 (3) Lecithin contains phosphorus atom in its structure.  
 (4) Tyrosine possesses aromatic ring in its structure.  
 Ans: (2)  
 Sol:
- Q.53 Which of the following statements is incorrect about gymnosperms ?  
 (1) They are heterosporous  
 (2) Male and female gametophytes are free living  
 (3) Most of them have narrow leaves with thick cuticle  
 (4) Their seeds are not covered  
 Ans: (2)  
 Sol:
- Q.54 A species which was introduced for ornamentation but has become a trouble-some weed in India :  
 (1) Parthenium hysterophorus (2) Eichhornia crassipes  
 (3) Prosopis juliflora (4) Trapa spinosa  
 Ans: (2)  
 Sol:
- Q.55 Correct position of floral parts over thalamus in mustard plant is :  
 (1) Gynoecium occupies the highest position, while the other parts are situated below it.  
 (2) Margin of the thalamus grows upward, enclosing the ovary completely, and other parts arise below the ovary.  
 (3) Gynoecium is present in the centre and other parts cover it partially.  
 (4) Gynoecium is situated in the centre, and other parts of the flower are located at the rim of the thalamus, at the same level.  
 Ans: (1)  
 Sol:
- Q.56 In Recombinant DNA technology antibiotics are used :  
 (1) to keep medium bacteria-free  
 (2) to detect alien DNA  
 (3) to impart disease-resistance to the host plant  
 (4) as selectable markers

Ans: (2,4)

Sol:

Q.57 According to Alexander von Humboldt :

- (1) Species richness decreases with increasing area of exploration
- (2) Species richness increases with increasing area, but only up to limit
- (3) There is no relationship between species richness and area explored.
- (4) Species richness goes on increasing with increasing area of exploration

Ans: (2)

Sol:

Q.58 Which of the following is incorrect for wind-pollinated plants ?

- (1) Well exposed stamens and stigma
- (2) Many ovules in each ovary
- (3) Flowers are small and not brightly coloured
- (4) Pollen grains are light and non-sticky

Ans: (2)

Sol:

Q.59 Which of the following is the correct floral formula of Liliaceae ?

- (1)  $\% \overset{\uparrow}{\underset{\downarrow}{\text{Q}}} C_{1+2+2} A_{(9)+1} \underline{G}_1$     (2)  $\oplus \overset{\uparrow}{\text{O}} \underset{\downarrow}{\text{Q}} K_{(5)} \overline{C_{(5)} A_5} \underline{G}_{(2)}$     (3)  $\text{Br} \oplus \overset{\uparrow}{\underset{\downarrow}{\text{Q}}} \overline{P_{(3+3)} A_{3+3}} G_{(3)}$     (4)  $\oplus \overset{\uparrow}{\underset{\downarrow}{\text{Q}}} K_{(5)} \overline{C_{(5)} A_5} \underline{G}_{(2)}$

Ans: (3)

Sol:

Q.60 In the polynucleotide chain of DNA, a nitrogenous base is linked to the –OH of:

- (1) 2'C pentose sugar
- (2) 3'C pentose sugar
- (3) 5'C pentose sugar
- (4) 1'C pentose sugar

Ans: (4)

Sol:

Q.61 In Glycine max, the product of biological nitrogen fixation is transported from the root nodules to other parts as :

- (1) Ammonia
- (2) Glutamate
- (3) Nitrates
- (4) Ureides

Ans: (4)

Sol:

Q.62 The number of contrasting characters studied by Mendel for his experiments was :

- (1) 14
- (2) 2
- (3) 4
- (4) 7

Ans: (4)

Sol:

Q.63 Attachment of spindle fibers to kinetochores of chromosomes becomes evident in :

- (1) Anaphase
- (2) Telophase
- (3) Prophase
- (4) Metaphase

Ans: (4)

Sol:

Q.64 Match the items in Column-I with those in Column-II :

**Column I**                      **Column II**

- (a) Herbivores-Plants (i) Commensalism  
 (b) Mycorrhiza-Plants (ii) Mutualism  
 (c) Sheep-Cattle (iii) Predation  
 (d) Orchid-Tree (iv) Competition

Select the correct option from following :

- (1) (a)-(iv), (b)-(ii), (c)-(i), (d)-(iii) (2) (a)-(iii), (b)-(ii), (c)-(iv), (d)-(i)  
 (3) (a)-(ii), (b)-(i), (c)-(iii), (d)-(iv) (4) (a)-(i), (b)-(iii), (c)-(iv), (d)-(ii)

Ans: (2)

Sol:

Q.65 Vegetative propagule in Agave is as :

- (1) Rhizome (2) Bulbil (3) Offset (4) Eye

Ans: (2)

Sol:

Q.66 Match the following :

- (a) Aquaporin (i) Amide  
 (b) Asparagine (ii) Polysaccharide  
 (c) Abscisic acid (iii) Polypeptide  
 (d) Chitin (iv) Carotenoids

Select the correct option :

- (1) (a)-(iii), (b)-(i), (c)-(iv), (d)-(ii) (2) (a)-(ii), (b)-(iii), (c)-(iv), (d)-(i)  
 (3) (a)-(ii), (b)-(i), (c)-(iv), (d)-(iii) (4) (a)-(iii), (b)-(i), (c)-(ii), (d)-(iv)

Ans: (1)

Sol:

Q.67 Which of the following elements helps in maintaining the structure of ribosomes ?

- (1) Magnesium (2) Zinc (3) Copper (4) Molybdenum

Ans: (1)

Sol:

Q.68 Who coined the term 'Kinetin' ?

- (1) Skoog and Miller (2) Darwin (3) Went (4) Kurosawa

Ans: (1)

Sol:

Q.69 In the following in each set a conservation approach and an example of method of conservation are given

- (a) In situ conservation - Biosphere Reserve  
 (b) Ex situ conservation - Sacred groves  
 (c) In situ conservation - Seed bank  
 (d) Ex situ conservation - Cryopreservation

Select the option with correct match of approach and method :

- (1) (a) and (c) (2) (a) and (d) (3) (b) and (d) (4) (a) and (b)

Ans: (2)

Sol:

- Q.70 Embryological support for evolution was proposed by :  
(1) Ernst Heckel (2) Karl Ernst von Baer (3) Charles Darwin (4) Alfred Wallace  
Ans: (1)  
Sol:
- Q.71 During non-cyclic photophosphorylation, when electrons are lost from the reaction centre at PS II, what is the source which replaces these electrons?  
(1) Oxygen (2) Water (3) Carbon dioxide (4) Light  
Ans: (2)  
Sol:
- Q.72 In a mitotic cycle, the correct sequence of phases is  
(1) S, G<sub>1</sub>, G<sub>2</sub>, M (2) G<sub>1</sub>, S, G<sub>2</sub>, M (3) M, G<sub>1</sub>, G<sub>2</sub>, S (4) G<sub>1</sub>, G<sub>2</sub>, S, M  
Ans: (2)  
Sol:
- Q.73 Inclusion bodies of blue- green, purple and green photosynthetic bacteria are :  
(1) Contractile vacuoles (2) Gas vacuoles (3) Centrioles (4) Microtubules  
Ans: (2)  
Sol:
- Q.74 Large, empty colourless cells of the adaxial epidermis along the veins of grass leaves are  
(1) Lenticels (2) Guard cells (3) Bundle sheath cells (4) Bulliform cells  
Ans: (4)  
Sol:
- Q.75 The biosynthesis of ribosomal RNA occurs in :  
(1) Ribosomes (2) Golgi apparatus (3) Microbodies (4) Nucleolus  
Ans: (4)  
Sol:
- Q.76 Which of the following is incorrect about Cynobacteria ?  
(1) They are photoautotrophs  
(2) They lack heterocysts  
(3) They often form blooms in polluted water bodies  
(4) They have chlorophyll A similar to green plants  
Ans: (2)  
Sol:
- Q.77 Which of the following statements about cork cambium is incorrect?  
(1) It forms secondary cortex on its outside  
(2) It forms a part of periderm  
(3) It is responsible for the formation of lenticels  
(4) It is a couple of layers thick  
Ans: (1)

Sol:

Q.78 Select the incorrect statement.

- (1) Transport of molecules in phloem can be bidirectional.
- (2) Movement of minerals in xylem is unidirectional.
- (3) Unloading of sucrose at sink does not involve the utilization of ATP.
- (4) Elements most easily mobilized in plants from one region to another are: phosphorus, sulphur, nitrogen and potassium.

Ans: (3)

Sol:

Q.79 Air (Prevention and Control of Pollution) Act was amended in 1987 to include among pollutants

- (1) Vehicular exhaust
- (2) Allergy causing pollen
- (3) Noise
- (4) Particulates of size 2.5 micrometer or below

Ans: (3)

Sol:

Q.80 Inhibitory substances in dormant seeds cannot be removed by subjecting seeds to :

- (1) Gibberellic acid
- (2) Nitrate
- (3) Ascorbic acid
- (4) Chilling conditions

Ans: (3)

Sol:

Q.81 Match the following techniques or instruments with their usage :

- |                     |   |
|---------------------|---|
| (a) Bioreactor      | (i) Separation of DNA fragments                                   |
| (b) Electrophoresis | (ii) Production of large quantities of products                   |
| (c) PCR             | (iii) Detection of pathogen, based on antigen – antibody reaction |
| (d) ELISA           | (iv) Amplification of nucleic acids                               |

Select the correct option from following:

- |  |  |
|--|--|
| (1) (a)-(iii), (b)-(ii), (c)-(iv), (d)-(i) | (2) (a)-(ii), (b)-(i), (c)-(iv), (d)-(iii) |
| (3) (a)-(iv), (b)-(iii), (c)-(ii), (d)-(i) | (4) (a)-(ii), (b)-(i), (c)-(iii), (d)-(iv) |

Ans: (2)

Sol:

Q.82 Which of the following statements is incorrect?

- (1) RuBisCO is a bifunctional enzyme
- (2) In C<sub>4</sub> plants, the site of RuBisCO activity is mesophyll cell
- (3) The substrate molecule for RuBisCO activity is a 5-carbon compound
- (4) RuBisCO action requires ATP and NADPH

Ans: (2)

Sol:

Q.83 Which of the following statements is incorrect regarding the phosphorus cycle?

- (1) Phosphates are the major form of phosphorus reservoir
- (2) Phosphorus solubilising bacteria facilitate the release of phosphorus from organic remains



- (3) There is appreciable respiratory release of phosphorus into atmosphere  
(4) It is sedimentary cycle

Ans: (3)

Sol:

Q.84 After about how many years of formation of earth, life appeared on this planet ?

- (1) 500 billion years (2) 50 million years (3) 500 million years (4) 50 billion years

Ans: (3)

Sol:

Q.85 In a mixture, DNA fragments are separated by :-

- (1) Bioprocess engineering (2) Restriction digestion  
(3) Electrophoresis (4) Polymerase chain reaction

Ans: (3)

Sol:

Q.86 Identify the correct features of Mango and Coconut fruits.

- (i) In both fruit is a drupe  
(ii) Endocarp is edible in both  
(iii) Mesocarp in Coconut is fibrous, and in Mango it is fleshy  
(iv) In both, fruit develops from monocarpellary ovary

Select the correct option from below :

- (1) (i), (iii) and (iv) only (2) (i), (ii) and (iii) only (3) (i) and (iv) only (4) (i) and (ii) only

Ans: (1)

Sol:

Q.87 The impact of immigration on population density is :-

- (1) Negative (2) Both positive and negative  
(3) Neutralized by natality (4) Positive

Ans: (4)

Sol:

Q.88 Male and female gametophytes do not have an independent free living existence in :-

- (1) Pteridophytes (2) Algae (3) Angiosperms (4) Bryophytes

Ans: (3)

Sol:

Q.89 Match the following concerning the activity/function and the phytohormone involved :-

- (a) Fruit ripener (i) Abscisic acid  
(b) Herbicide (ii) GA3  
(c) Bolting agent (iii) 2, 4-D  
(d) Stress hormone (iv) Ethephon

Select the correct option from following :-

- (1) (a)-(ii), (b)-(iii), (c)-(iv), (d)-(i) (2) (a)-(iii), (b)-(iv), (c)-(ii), (d)-(i)  
(3) (a)-(iv), (b)-(iii), (c)-(ii), (d)-(i) (4) (a)-(iv), (b)-(ii), (c)-(i), (d)-(iii)

Ans: (3)

Sol:

Q.90 Pyruvate dehydrogenase activity during aerobic respiration requires :-

- (1) Calcium                      (2) Iron                      (3) Cobalt                      (4) Magnesium

Ans: (4)

Sol:

Q.91 The rate of decomposition is faster in the ecosystem due to following factors EXCEPT :-

- (1) Detritus rich in sugars                      (2) Warm and moist environment  
(3) Presence of aerobic soil microbes                      (4) Detritus richer in lignin and chitin

Ans: (4)

Sol:

Q.92 For the commercial and industrial production of Citric Acid, which of the following microbes is used ?

- (1) *Aspergillus niger*                      (2) *Lactobacillus* sp  
(3) *Saccharomyces cerevisiae*                      (4) *Clostridium butylicum*

Ans: (1)

Sol:

Q.93 Which of the following STDs are not curable ?

- (1) Genital herpes, Hepatitis B, HIV infection                      (2) Chlamydia, Syphilis, Genital warts  
(3) HIV, Gonorrhoea, Trichomoniasis                      (4) Gonorrhoea, Trichomoniasis, Hepatitis B

Ans: (1)

Sol:

Q.94 Spooling is :-

- (1) Amplification of DNA  
(2) Cutting of separated DNA bands from the agarose gel  
(3) Transfer of separated DNA fragments to synthetic membranes  
(4) Collection of isolated DNA

Ans: (4)

Sol:

Q.95 The phenomenon of evolution of different species in a given geographical area starting from a point and spreading to other habitats is called :-

- (1) Saltation                      (2) Co-evolution                      (3) Natural selection                      (4) Adaptive radiation

Ans: (4)

Sol:

Q.96 The best example for pleiotropy is :-

- (1) Skin colour                      (2) Phenylketoneuria                      (3) Colour Blindness                      (4) ABO Blood group

Ans: (2)

Sol:

Q.97 In cockroach, identify the parts of the foregut in correct sequence :-

- (1) Mouth → Oesophagus → Pharynx → Crop → Gizzard  
 (2) Mouth → Crop → Pharynx → Oesophagus → Gizzard  
 (3) Mouth → Gizzard → Crop → Pharynx → Oesophagus  
 (4) Mouth → Pharynx → Oesophagus → Crop → Gizzard

Ans: (4)

Sol:

Q.98 Match the following columns and select the correct option :-

**Column-I**

**Column-II**

- (a) Pituitary hormone (i) Steroid  
 (b) Epinephrine (ii) Neuropeptides  
 (c) Endorphins (iii) Peptides, proteins  
 (d) Cortisol (iv) Biogenic amines

- (1) (a)-(iv), (b)-(i), (c)-(ii), (d)-(iii) (2) (a)-(iii), (b)-(iv), (c)-(ii), (d)-(i)  
 (3) (a)-(iv), (b)-(iii), (c)-(i), (d)-(ii) (4) (a)-(iii), (b)-(iv), (c)-(i), (d)-(ii)

Ans: (2)

Sol:

Q.99 Which of the following options does correctly represent the characteristic features of phylum Annelida ?

- (1) Triploblastic, unsegmented body and bilaterally symmetrical.  
 (2) Triploblastic, segmented body and bilaterally symmetrical.  
 (3) Triploblastic, flattened body and acoelomate condition.  
 (4) Diploblastic, mostly marine and radially symmetrical.

Ans: (2)

Sol:

Q.100 Match the following columns and select the correct option :-

**Column-I**

**Column-II**

- (a) Dragonflies (i) Biocontrol agents of several plant pathogens  
 (b) Bacillus thuringiensis (ii) Get rid of Aphids and mosquitoes  
 (c) Glomus (iii) Narrow spectrum insecticidal applications  
 (d) Baculoviruses (iv) Biocontrol agents of lepidopteran plant pests  
 (v) Absorb phosphorus from soil

- (1) (a)-(iii), (b)-(v), (c)-(iv), (d)-(i) (2) (a)-(ii), (b)-(i), (c)-(iii), (d)-(iv)  
 (3) (a)-(ii), (b)-(iii), (c)-(iv), (d)-(v) (4) (a)-(ii), (b)-(iv), (c)-(v), (d)-(iii)

Ans: (4)

Sol:

Q.101 Intrinsic factor that helps in the absorption of vitamin B<sub>12</sub> is secreted by :-

- (1) Goblet cells (2) Hepatic cells (3) Oxyntic cells (4) Chief cells

Ans: (3)

Sol:

Q.102 Hormones stored and released from neurohypophysis are :-

- (1) Thyroid stimulating hormone and Oxytocin
- (2) Oxytocin and Vasopressin
- (3) Follicle stimulating hormone and Leutinizing hormone
- (4) Prolactin and Vasopressin

Ans: (2)

Sol:

Q.103 Match the following columns and select the correct option :

**Column – I**

**Column - II**

- |                 |                            |
|-----------------|----------------------------|
| (i) Typhoid     | (a) Haemophilus influenzae |
| (ii) Malaria    | (b) Wuchereria bancrofti   |
| (iii) Pneumonia | (c) Plasmodium vivax       |
| (iv) Filariasis | (d) Salmonella typhi       |

- |  |  |
|--|--|
| (1) (i)-(d), (ii)-(c), (iii)-(a), (iv)-(b) | (2) (i)-(c), (ii)-(d), (iii)-(b), (iv)-(a) |
| (3) (i)-(a), (ii)-(c), (iii)-(b), (iv)-(d) | (4) (i)-(a), (ii)-(b), (iii)-(d), (iv)-(c) |

Ans: (1)

Sol:

Q.104 In human beings, at the end of 12 weeks (first trimester) of pregnancy, the following is observed:

- (1) Eyelids and eyelashes are formed
- (2) Most of the major organ systems are formed
- (3) The head is covered with fine hair
- (4) Movement of the foetus

Ans: (2)

Sol:

Q.105 Match the following columns and select the correct option :

**Column – I**

**Column – II**

- |                    |  |
|--------------------|--|
| (a) Rods and Cones | (i) Absence of photoreceptor cells       |
| (b) Blind Spot     | (ii) Cones are densely packed            |
| (c) Fovea          | (iii) Photoreceptor cells                |
| (d) Iris           | (iv) Visible coloured portion of the eye |

- |  |  |
|--|--|
| (1) (a)-(iii), (b)-(i), (c)-(ii), (d)-(iv) | (2) (a)-(ii), (b)-(iii), (c)-(i), (d)-(iv) |
| (3) (a)-(iii), (b)-(iv), (c)-(ii), (d)-(i) | (4) (a)-(ii), (b)-(iv), (c)-(iii), (d)-(i) |

Ans: (1)

Sol:

Q.106 The size of Pleuropneumonia - like Organism (PPLo) is :

- |                        |                       |                         |                       |
|------------------------|-----------------------|-------------------------|-----------------------|
| (1) 0.02 $\mu\text{m}$ | (2) 1-2 $\mu\text{m}$ | (3) 10-20 $\mu\text{m}$ | (4) 0.1 $\mu\text{m}$ |
|------------------------|-----------------------|-------------------------|-----------------------|

Ans: (4)

Q.107 The proteolytic enzyme rennin is found in :

- |                      |                |                   |                      |
|----------------------|----------------|-------------------|----------------------|
| (1) Intestinal juice | (2) Bile juice | (3) Gastric juice | (4) Pancreatic juice |
|----------------------|----------------|-------------------|----------------------|

Ans: (3)

Sol:

Q.108 Match the following group of organisms with their respective distinctive characteristics and select the correct option :

<b>Organisms</b>	<b>Characteristics</b>
(a) Platyhelminthes	(i) Cylindrical body with no segmentation
(b) Echinoderms	(ii) Warm blooded animals with direct development
(c) Hemichordates	(iii) Bilateral symmetry with incomplete digestive system
(d) Aves	(iv) Radial symmetry with indirect development
(1) (a)-(iii), (b)-(iv), (c)-(i), (d)-(ii)	(2) (a)-(ii), (b)-(iii), (c)-(iv), (d)-(i)
(3) (a)-(iv), (b)-(i), (c)-(ii), (d)-(iii)	(4) (a)-(i), (b)-(ii), (c)-(iii), (d)-(iv)

Ans: (1)

Sol:

Q.109 Cyclosporin A, used as immuno suppression agent, is produced from :

(1) <i>Monascus purpureus</i>	(2) <i>Saccharomyces cerevisiae</i>
(3) <i>Penicillium notatum</i>	(4) <i>Trichoderma polysporum</i>

Ans: (4)

Sol:

Q.110 Select the correct statement from the following :

- (1) Gel electrophoresis is used for amplification of a DNA segment.
- (2) The polymerase enzyme joins the gene of interest and the vector DNA.
- (3) Restriction enzyme digestions are performed by incubating purified DNA molecules with the restriction enzymes of optimum conditions.
- (4) PCR is used for isolation and separation of gene of interest.

Ans: (3)

Sol:

Q.111 The increase in osmolarity from outer to inner medullary interstitium is maintained due to :

- (i) Close proximity between Henle's loop and vasa recta
  - (ii) Counter current mechanism
  - (iii) Selective secretion of  $\text{HCO}_3^-$  and hydrogen ions in PCT
  - (iv) Higher blood pressure in glomerular capillaries
- (1) Only(ii)                      (2) (iii) and (iv)                      (3) (i), (ii) and (iii)                      (4) (i) and (ii)

Ans: (4)

Sol:

Q.112 The yellowish fluid "colostrum" secreted by mammary glands of mother during the initial days of lactation has abundant antibodies (IgA) to protect the infant. This type of immunity is called as :

- (1) Passive immunity    (2) Active immunity    (3) Acquired immunity    (4) Autoimmunity

Ans: (1)

Sol:

Q.113 Match the following columns with reference to cockroach and select the correct option :

<b>Column – I</b>	<b>Column – II</b>
(a) Grinding of the food particles	(i) Hepatic caecal
(b) Secrete gastric juice	(ii) 10 <sup>th</sup> segment

- (c) 10 pairs  
(d) Anal cerci
- (iii) Proventriculus  
(iv) Spiracles  
(v) Alary muscles

- (1) (a)-(iii), (b)-(i), (c)-(iv), (d)-(ii)  
(2) (a)-(iv), (b)-(iii), (c)-(v), (d)-(ii)
- (3) (a)-(i), (b)-(iv), (c)-(iii), (d)-(ii)  
(4) (a)-(ii), (b)-(iii), (c)-(i), (d)-(iv)

Ans: (1)

Sol:

Q.114 RNA interference is used for which of the following purposes in the field of biotechnology ?

- (1) to develop a plant tolerant to abiotic stresses  
(2) to develop a pest resistant plant against infestation by nematode  
(3) to enhance the mineral usage by the plant  
(4) to reduce post harvest losses

Ans: (2)

Sol:

Q.115 E.coli has only  $4.6 \times 10^6$  base pairs and completes the process of replication within 18 minutes; then the average rate of polymerisation is approximately-

- (1) 2000 base pairs/second  
(2) 3000 base pairs/second  
(3) 4000 base pairs/second  
(4) 1000 base pairs/second

Ans: (1)

Sol:

Q.116 Progesterone alone or in combination with estrogens can be used as a contraceptive in the form of -

- (1) Implants only  
(2) Injections only  
(3) Pills, injections and implants  
(4) Pills only

Ans: (3)

Sol:

Q.117 According to Central Pollution Control Board [CPCB] what size (in diameter) of particulate is responsible for causing greater harm to human health ?

- (1) 3.5 micrometers (2) 2.5 micrometers (3) 4.0 micrometers (4) 3.0 micrometers

Ans: (2)

Sol:

Q.118 The Total Lung Capacity (TLC) is the total volume of air accommodated in the lungs at the end of a forced inspiration. This includes :

- (1) RV; IC (Inspiratory Capacity); EC (Expiratory Capacity); and ERV  
(2) RV; ERV; IC and EC  
(3) RV; ERV; VC (Vital Capacity) and FRC (Functional Residual Capacity)  
(4) RV (Residual Volume); ERV (Expiratory Reserve Volume); TV (Tidal Volume); and IRV (Inspiratory Reserve Volume)

Ans: (4)

Sol:

Q.119 Select the correct option of haploid cells from the following groups :

- (1) Primary oocyte, Secondary oocyte, Spermatid
- (2) Secondary spermatocyte, First polar body, Ovum
- (3) Spermatogonia, Primary spermatocyte, Spermatid
- (4) Primary spermatocyte, Secondary spermatocyte, Second polar body

Ans: (2)

Sol:

Q.120 During Meiosis 1, in which stage synapsis takes place ?

- (1) Pachytene
- (2) Zygotene
- (3) Diplotene
- (4) Leptotene

Ans: (2)

Sol:

Q.121 Match the following columns and select the correct option :

**Column – I**

- (a) Smooth endoplasmic reticulum
- (b) Rough endoplasmic reticulum
- (c) Golgi complex
- (d) Centriole

**Column – II**

- (i) Protein synthesis
- (ii) Lipid synthesis
- (iii) Glycosylation
- (iv) Spindle formation

(1) (a)-(ii), (b)-(i), (c)-(iii), (d)-(iv)

(2) (a)-(iii), (b)-(i), (c)-(ii), (d)-(iv)

(3) (a)-(iv), (b)-(ii), (c)-(i), (d)-(iii)

(4) (a)-(i), (b)-(ii), (c)-(iii), (d)-(iv)

Ans: (1)

Sol:

Q.122 Select the correct statement :

- (1) Atrial Natriuretic Factor increases the blood pressure.
- (2) Angiotensin II is a powerful vasodilator.
- (3) Counter current pattern of blood flow is not observed in vasa recta.
- (4) Reduction in Glomerular Filtration Rate activates JG cells to release renin.

Ans: (4)

Sol:

Q.123 Which of the following is associated with decrease in cardiac output ?

- (1) Sympathetic nerves
- (2) Parasympathetic neural signals
- (3) Pneumotaxic centre
- (4) Adrenal medullary hormones

Ans: (2)

Sol:

Q.124 Inbreeding depression is -

- (1) Reduced motility and immunity due to close inbreeding
- (2) Decreased productivity due to mating of superior male and inferior female
- (3) Decrease in body mass of progeny due to continued close inbreeding
- (4) Reduced fertility and productivity due to continued close inbreeding

Ans: (4)

Sol:

Q.125 Select the incorrectly matched pair from following:

- (1) Chondrocytes - Smooth muscle cells                      (2) Neurons - Nerve cells  
(3) Fibroblast - Areolar tissue                                      (4) Osteocytes - Bone cells

Ans: (1)

Sol:

Q.126 The laws and rules to prevent unauthorized exploitation of bio-resources are termed as -

- (1) Biopatenting                      (2) Bioethics                      (3) Bioengineering                      (4) Biopiracy

Ans: (1)

Sol:

Q.127 Match the following columns and select the correct option :

**Column – I**

**Column – II**

- (a) Ovary                      (i) Human chorionic Gonadotropin  
(b) Placenta                      (ii) Estrogen & Progesterone  
(c) Corpus luteum                      (iii) Androgens  
(d) Leydig cells                      (iv) Progesterone only
- (1) (a)-(iv), (b)-(iii), (c)-(ii), (d)-(i)                      (2) (a)-(i), (b)-(ii), (c)-(iii), (d)-(iv)  
(3) (a)-(i), (b)-(iii), (c)-(ii), (d)-(iv)                      (4) (a)-(ii), (b)-(i), (c)-(iv), (d)-(iii)

Ans: (4)

Sol:

Q.128 Match the following columns and select the correct option :

**Column – I**

**Column – II**

- (a) Aptenodytes                      (i) Flying fox  
(b) Pteropus                      (ii) Angel fish  
(c) Pterophyllum                      (iii) Lamprey  
(d) Petromyzon                      (iv) Penguin
- (1) (a)-(iii), (b)-(iv), (c)-(ii), (d)-(i)                      (2) (a)-(iii), (b)-(iv), (c)-(i), (d)-(ii)  
(3) (a)-(iv), (b)-(i), (c)-(ii), (d)-(iii)                      (4) (a)-(ii), (b)-(i), (c)-(iv), (d)-(iii)

Ans: (3)

Sol:

Q.129 A Hominid fossil discovered in Java in 1891, now extinct, having cranial capacity of about 900 cc was:

- (1) Homo erectus                      (2) Neanderthal man                      (3) Homo sapiens                      (4) Australopithecus

Ans: (1)

Sol:

Q.130 Match the following events that occur in their respective phases of cell cycle and select the correct option :

- (a) G<sub>1</sub> phase                      (i) Cell grows and organelle duplication  
(b) S phase                      (ii) DNA replication and chromosome duplication  
(c) G<sub>2</sub> phase                      (iii) Cytoplasmic growth  
(d) Metaphase in                      (iv) Alignment of M-phase chromosomes
- (1) (a)-(ii), (b)-(iii), (c)-(iv), (d)-(i)                      (2) (a)-(iii), (b)-(iv), (c)-(i), (d)-(ii)



(3) (a)-(iv), (b)-(i), (c)-(ii), (d)-(iii)

(4) (a)-(i), (b)-(ii), (c)-(iii), (d)-(iv)

Ans: (4)

Sol:

Q.131 Match the following columns and select the correct option :

**Column – I**

- (a) Pneumotaxic Centre
- (b) O<sub>2</sub> Dissociation curve
- (c) Carbonic anhydrase
- (d) Primary site of exchange of gases

**Column – II**

- (i) Alveoli
- (ii) Pons region of brain
- (iii) Haemoglobin
- (iv) R.B.C.

(1) (a)-(i), (b)-(iii), (c)-(ii), (d)-(iv)

(2) (a)-(ii), (b)-(iii), (c)-(iv), (d)-(i)

(3) (a)-(iii), (b)-(ii), (c)-(iv), (d)-(i)

(4) (a)-(iv), (b)-(i), (c)-(iii), (d)-(ii)

Ans: (2)

Sol:

Q.132 Which is the basis of genetic mapping of human genome as well as DNA finger printing ?

(1) Polymorphism in DNA sequence

(2) Single nucleotide polymorphism

(3) Polymorphism in hnRNA sequence

(4) Polymorphism in RNA sequence

Ans: (1)

Sol:

Q.133 Which of the following conditions cause erythroblastosis foetalis ?

(1) Mother Rh<sup>+ve</sup> and foetus Rh<sup>-ve</sup>

(2) Mother Rh<sup>-ve</sup> and foetus Rh<sup>+ve</sup>

(3) Both mother and foetus Rh<sup>-ve</sup>

(4) Both mother and foetus Rh<sup>+ve</sup>

Ans: (2)

Sol:

Q.134 All vertebrates are chordates but all chordates are not vertebrates, why ?

(1) Notochord is replaced by vertebral column in adult of some chordates.

(2) Ventral hollow nerve cord remains throughout life in some chordates.

(3) All chordates possess vertebral column.

(4) All chordates possess notochord throughout their life.

Ans: (1)

Sol:

Q.135 Match the following columns and select the correct option

**Column – I**

- (a) Gout
- (b) Osteoporosis
- (c) Tetany
- (d) Muscular

**Column – II**

- (i) Decreased levels of estrogen
- (ii) Low Ca<sup>++</sup> ions in the blood
- (iii) Accumulation of uric acid crystals
- (iv) Auto immune dystrophy disorder
- (v) Genetic disorder

(1) (a)-(ii), (b)-(i), (c)-(iii), (d)-(iv)

(2) (a)-(iii), (b)-(i), (c)-(ii), (d)-(v)

(3) (a)-(iv), (b)-(v), (c)-(i), (d)-(ii)

(4) (a)-(i), (b)-(ii), (c)-(iii), (d)-(iv)

Ans: (2)

Sol:

Q.136 The E.M. wave with shortest wavelength among the following is  
(1) Ultraviolet rays      (2) X-rays      (3) Gamma-rays      (4) Microwaves

Ans: (3)

Sol: Gamma-rays

Q.137 The angular speed of the wheel of a vehicle is increased from 360 rpm to 1200 rpm in 14 second. Its angular acceleration is

(1)  $2\pi \text{ rad/s}^2$       (2)  $28\pi \text{ rad/s}^2$       (3)  $120\pi \text{ rad/s}^2$       (4)  $1 \text{ rad/s}^2$

Ans: (1)

Sol:  $t = 14 \text{ s}$

$$\omega_0 = \frac{360}{60} \text{ rps} = 12\pi \text{ rad s}^{-1}$$

$$\omega = \frac{1200}{60} \text{ rps} = 4\pi \text{ rad s}^{-1}$$

$$\omega = \omega_0 + \alpha t$$

$$\Rightarrow \alpha = \frac{\omega - \omega_0}{t} = \frac{28\pi}{14} = 2\pi \text{ rad s}^{-2}$$

Q.138 What happens to the mass number and atomic number of an element when it emits  $\alpha$ -radiation?

- (1) Mass number decreases by four and atomic number decreases by two.  
(2) Mass number and atomic number remain unchanged.  
(3) Mass number remains unchanged while atomic number decreases by one.  
(4) Mass number increases by four and atomic number increases by two.

Ans: (2)

Sol: No change

Q.139 The angle of  $1'$  (minute of arc) in radian is nearly equal to

(1)  $2.91 \times 10^{-4} \text{ rad}$       (2)  $4.85 \times 10^{-4} \text{ rad}$       (3)  $4.80 \times 10^{-6} \text{ rad}$       (4)  $1.75 \times 10^{-2} \text{ rad}$

Ans: (1)

Sol:  $1' = \left(\frac{1}{60}\right)^\circ = \frac{1}{60} \times \frac{\pi}{180} \text{ radian}$   
 $= 2.91 \times 10^{-4} \text{ radian}$

Q.140 The magnetic flux linked with a coil (in Wb) is given by the equation

$$\phi = 5t^2 + 3t + 16$$

The magnitude of induced emf in the coil at the fourth second will be

(1) 33 V      (2) 43 V      (3) 108 V      (4) 10 V

Ans: (2)

Sol:  $\phi = 5t^2 + 3t + 16$

$$|\varepsilon| = \left| \frac{d\phi}{dt} \right| = 10t + 3$$

At  $t = 4 \text{ sec}$ .

$$|\varepsilon| = 40 + 3 = 43 \text{ volt}$$

Q.141 The electric field at a point on the equatorial plane at a distance  $r$  from the centre of a dipole having dipole moment  $\vec{p}$  is given by

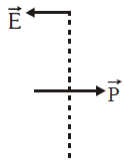
( $r \gg$  separation of two charges forming the dipole,  $\epsilon_0$  – permittivity of free space)

$$(1) \vec{E} = \frac{\vec{P}}{4\pi\epsilon_0 r^3} \quad (2) \vec{E} = \frac{2\vec{P}}{4\pi\epsilon_0 r^3} \quad (3) \vec{E} = -\frac{\vec{P}}{4\pi\epsilon_0 r^2} \quad (4) \vec{E} = -\frac{\vec{P}}{4\pi\epsilon_0 r^3}$$

Ans: (4)

Sol:  $\vec{E} = \frac{k\vec{P}}{r^3}$

$$\vec{E} = -\frac{\vec{P}}{4\pi\epsilon_0 r^3}$$



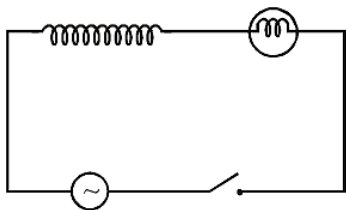
Q.142 A plano-convex lens of unknown material and unknown focal length is given. With the help of a spherometer we can measure the

- (1) focal length of the lens (2) radius of curvature of the curved surface  
 (3) aperture of the lens (4) refractive index of the material

Ans: (2)

Sol: Spherometer → used to measure radius of curvature of the curved surface.

Q.143 A light bulb and an inductor coil are connected to an ac source through a key as shown in the figure below. The key is closed and after sometime an iron rod is inserted into the interior of the inductor. The glow of the light bulb



- (1) decreases (2) remains unchanged (3) will fluctuate (4) increases

Ans: (1)

Sol:  $Z = \sqrt{R^2 + X_L^2}$

$X_L \uparrow, Z \uparrow, I \downarrow$

Q.144 The efficiency of a Carnot engine depends upon

- (1) the temperature of the sink only  
 (2) the temperatures of the source and sink  
 (3) the volume of the cylinder of the engine  
 (4) the temperature of the source only

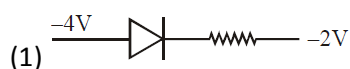
Ans: (2)

Sol:  $\eta = 1 - \frac{T_2}{T_1}$

$T_1$  = temperature of source

$T_2$  = temperature of sink

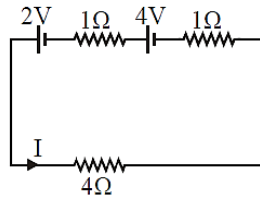
Q.145 Out of the following which one is a forward biased diode ?



Ans: (4)

Sol: In forward bias  $V_p > V_N$

Q.146 For the circuit shown in the figure, the current  $I$  will be



(1) 0.75 A

(2) 1 A

(3) 1.5 A

(4) 0.5 A

Ans: (2)

Sol:  $I = \frac{2+4}{4+1+1} = \frac{6}{6} = 1 \text{ Amp}$

Q.147 Two coherent sources of light interfere and produce fringe pattern on a screen. For central maximum, the phase difference between the two waves will be

(1) zero

(2)  $\pi$

(3)  $3\pi/2$

(4)  $\pi/2$

Ans: (1)

Sol: For central maximum, the phase difference between the two waves will be zero.

Q.148 The total energy of an electron in the  $n^{\text{th}}$  stationary orbit of the hydrogen atom can be obtained by

(1)  $E_n = \frac{13.6}{n^2} eV$

(2)  $E_n = -\frac{13.6}{n^2} eV$

(3)  $E_n = \frac{1.36}{n^2} eV$

(4)  $E_n = -13.6 \times n^2 eV$

Ans: (2)

Sol: For hydrogen

$$E = -\frac{13.6}{n^2} eV$$

Q.149 Identify the function which represents a periodic motion

(1)  $e^{\omega t}$

(2)  $\log_e(\omega t)$

(3)  $\sin \omega t + \cos \omega t$

(4)  $e^{-\omega t}$

Ans: (3)

Sol: Option : 3 is a combination of SHM of same  $\omega$  and same axis so its resultant is also a SHM which is periodic.

Q.150 The de Broglie wavelength of an electron moving with kinetic energy of 144 eV is nearly

(1)  $102 \times 10^{-3} \text{ nm}$

(2)  $102 \times 10^{-4} \text{ nm}$

(3)  $102 \times 10^{-5} \text{ nm}$

(4)  $102 \times 10^{-2} \text{ nm}$

Ans: (1)

Sol:  $\lambda = \frac{12.27}{\sqrt{V}} \text{ \AA}$   
 $= \frac{12.27}{\sqrt{144}} \times 10^{-10}$   
 $= 1.02 \times 10^{-10} \text{ m}$   
 $= 102 \times 10^{-3} \text{ nm}$

Q.151 The mean free path  $\ell$  for a gas molecule depends upon diameter,  $d$  of the molecule as :

(1)  $\ell \propto \frac{1}{d^2}$

(2)  $\ell \propto d$

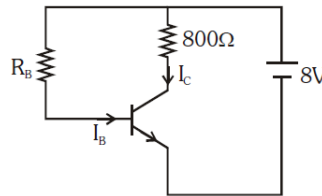
(3)  $\ell \propto d^2$

(4)  $\ell \propto \frac{1}{d}$

Ans: (1)

Sol:  $\lambda = \frac{1}{\sqrt{2}\pi d^2 n} \propto \frac{1}{d^2}$   
 $\lambda$  = mean free path  
 $d$  = effective diameter of molecule  
 $n$  = number density of molecules

Q.152 A n-p-n transistor is connected in common emitter configuration (see figure) in which collector voltage drop across load resistance ( $800 \Omega$ ) connected to the collector circuit is  $0.8 \text{ V}$ . The collector current is :



- (1)  $2 \text{ mA}$                       (2)  $0.1 \text{ mA}$                       (3)  $1 \text{ mA}$                       (4)  $0.2 \text{ mA}$

Ans: (3)

Sol: Voltage drop across load resistance =  $0.8 \text{ V}$

$$I_C = \frac{V_C}{R_C} = \frac{0.8}{800} = 10^{-3} \text{ A} = 1 \text{ mA}$$

Q.153 A person sitting in the ground floor of a building notices through the window, of height  $1.5 \text{ m}$ , a ball dropped from the roof of the building crosses the window in  $0.1 \text{ s}$ . What is the velocity of the ball when it is at the topmost point of the window ?

( $g = 10 \text{ m/s}^2$ )

- (1)  $15.5 \text{ m/s}$                       (2)  $14.5 \text{ m/s}$                       (3)  $4.5 \text{ m/s}$                       (4)  $20 \text{ m/s}$

Ans: (2)

Sol:  $S = ut + \frac{1}{2}at^2$

$$\left. \begin{array}{l} S = 1.5 \text{ m} \\ t = 0.1 \text{ s} \end{array} \right\} \begin{array}{l} \downarrow u \\ \downarrow \end{array}$$

$$1.5 = u(0.1) + \frac{1}{2}(10)(0.1)(0.1)$$

$$15 = u + 0.5$$

$$\Rightarrow u = 14.5 \text{ ms}^{-1}$$

Q.154 The magnetic field in a plane electromagnetic wave is given by :

$$B_y = 2 \times 10^{-7} \sin(\pi \times 10^3 x + 3\pi \times 10^{11}t) \text{ T}$$

Calculate the wavelength.

- (1)  $\pi \times 10^3 \text{ m}$                       (2)  $2 \times 10^{-3} \text{ m}$                       (3)  $2 \times 10^3 \text{ m}$                       (4)  $\pi \times 10^{-3} \text{ m}$

Ans: (2)

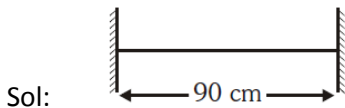
Sol:  $\lambda = \frac{2\pi}{K} = \frac{2\pi}{\pi \times 10^3}$

$$\lambda = 2 \times 10^{-3} \text{ m}$$

Q.155 The length of the string of a musical instrument is  $90 \text{ cm}$  and has a fundamental frequency of  $120 \text{ Hz}$ . Where should it be pressed to produce fundamental frequency of  $180 \text{ Hz}$  ?

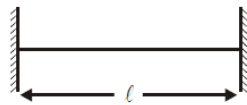
- (1)  $75 \text{ cm}$                       (2)  $60 \text{ cm}$                       (3)  $45 \text{ cm}$                       (4)  $80 \text{ cm}$

Ans: (2)



$$f = 120 \text{ Hz} = \frac{v}{2\ell}$$

$$120 = \frac{v}{2(0.9)}$$



$$f = 180 \text{ Hz} = \frac{v}{2\ell}$$

$$180 = \frac{20 \times 0.9}{\ell}$$

$$= 60 \text{ cm}$$

Q.156 The acceleration of an electron due to the mutual attraction between the electron and a proton when they are  $1.6 \text{ \AA}$  apart is, ( $m_e \approx 9 \times 10^{-31} \text{ kg}$ ,  $e = 1.6 \times 10^{-19} \text{ C}$ ) (Take  $\frac{1}{4\pi\epsilon_0} = 9 \times 10^9 \text{ Nm}^2 \text{ C}^{-2}$ )

(1)  $10^{24} \text{ m/s}^2$

(2)  $10^{23} \text{ m/s}^2$

(3)  $10^{22} \text{ m/s}^2$

(4)  $10^{25} \text{ m/s}^2$

Ans: (3)

Sol:  $F = K \frac{e^2}{r^2}$

$$a = K \frac{e^2}{mr^2}$$

$$a = 9 \times 10^9 \frac{(1.6 \times 10^{-19})^2}{(1.6 \times 10^{-10})^2 (9 \times 10^{-31})}$$

$$a = 10^{-29} \times 10^{51} = 10^{22} \text{ m/s}^2$$

Q.157 The wave nature of electrons was experimentally verified by,

(1) de Broglie

(2) Hertz

(3) Einstein

(4) Davisson and Germer

Ans: (4)

Sol: Davisson and Germer

Q.158 Two solid conductors are made up of same material, have same length and same resistance. One of them has a circular cross section of area  $A_1$  and the other one has a square cross section of area  $A_2$ . The ratio  $A_1/A_2$  is

(1) 1.5

(2) 1

(3) 0.8

(4) 2

Ans: (2)

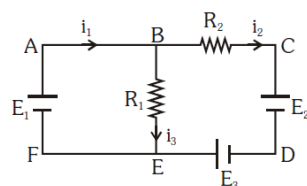
Sol:  $R = \rho \frac{\ell}{A}$

$$R_1 = R_2$$

$$\frac{1}{A_1} = \frac{1}{A_2}$$

$$\frac{A_1}{A_2} = 1$$

Q.159 For the circuit given below, the Kirchoff's loop rule for the loop BCDEB is given by the equation



(1)  $-i_2 R_2 + E_2 - E_3 + i_3 R_1 = 0$

(2)  $i_2 R_2 + E_2 - E_3 - i_3 R_1 = 0$

$$(3) i_2 R_2 + E_2 + E_3 + i_3 R_1 = 0$$

$$(4) -i_2 R_2 + E_2 + E_3 + i_3 R_1 = 0$$

Ans: (2)

Sol: By KVL

$$-i_2 R_2 - E_2 + E_3 + i_3 R_1 = 0$$

or

$$i_2 R_2 + E_2 - E_3 - i_3 R_1 = 0$$

Q.160 Three stars A, B, C have surface temperatures  $T_A, T_B, T_C$  respectively. Star A appears bluish, star B appears reddish and star C yellowish. Hence,

$$(1) T_A > T_B > T_C$$

$$(2) T_B > T_C > T_A$$

$$(3) T_C > T_B > T_A$$

$$(4) T_A > T_C > T_B$$

Ans: (4)

$$\xrightarrow{\text{VIBGYOR}} \lambda \uparrow$$

Sol:  $\xrightarrow{\hspace{2cm}} T \downarrow$

$$T_A > T_C > T_B$$

Q.161 A liquid does not wet the solid surface if angle of contact is :

$$(1) \text{ equal to } 45^\circ$$

$$(2) \text{ equal to } 60^\circ$$

$$(3) \text{ greater than } 90^\circ$$

$$(4) \text{ zero}$$

Ans: (3)

Sol: When angle of contact  $\geq 90^\circ$  then liquid doesn't wet solid.

Q.162 A point mass 'm' is moved in a vertical circle of radius 'r' with the help of a string. The velocity of the mass is  $\sqrt{7gr}$  at the lowest point. The tension in the string at the lowest point is :

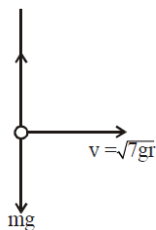
$$(1) 6 \text{ mg}$$

$$(2) 7 \text{ mg}$$

$$(3) 8 \text{ mg}$$

$$(4) 1 \text{ mg}$$

Ans: (3)



Sol:

$$T - mg = \frac{m(\sqrt{7gr})^2}{r}$$

$$T = 8 \text{ mg}$$

Q.163 An object is placed on the principal axis of a concave mirror at a distance of  $1.5 f$  ( $f$  is the focal length). The image will be at,

$$(1) -3 f$$

$$(2) 1.5 f$$

$$(3) -1.5 f$$

$$(4) 3 f$$

Ans: (1)

Sol:  $u = -1.5 f$

$$\frac{1}{u} + \frac{1}{v} = \frac{1}{f}$$

$$\frac{1}{-1.5f} + \frac{1}{v} = \frac{1}{-f}$$

$$\Rightarrow \frac{1}{v} = -\frac{1}{f} + \frac{1}{1.5f}$$

$$\frac{1}{f} = \frac{-1.5 + f}{1.5f} = \frac{-0.5}{1.5f}$$

$$v = -3f$$

Q.164 The half life of radioactive sample undergoing a-decay is  $1.4 \times 10^{17}$  s. If the number of nuclei in the sample is  $2.0 \times 10^{21}$ , the activity of the sample is nearly :

- (1)  $10^4$  Bq                      (2)  $10^5$  Bq                      (3)  $10^6$  Bq                      (4)  $10^3$  Bq

Ans: (1)

Sol:  $R = \lambda N$

$$R = \frac{0.639}{T} \times N$$

$$R = \frac{0.693}{1.4 \times 10^{17}} \times 2 \times 10^{21}$$

$$R = 10^4$$

Q.165 If the critical angle for total internal reflection from a medium to vacuum is  $45^\circ$ , then velocity of light in the medium is,

- (1)  $1.5 \times 10^8$  m/s              (2)  $\frac{3}{\sqrt{2}} \times 10^8$  m/s              (3)  $\sqrt{2} \times 10^8$  m/s              (4)  $3 \times 10^8$  m/s

Ans: (2)

Sol:  $\sin \theta_c = \frac{1}{\mu}$

$$\mu = \frac{1}{\sin \theta_c} = \frac{1}{\sin 45^\circ} = \frac{1}{(1/\sqrt{2})} = \sqrt{2}$$

$$\mu = \frac{c}{V} \Rightarrow V = \frac{c}{\mu} = \frac{3 \times 10^8}{\sqrt{2}} \text{ m/sec}$$

Q.166 A wheel with 20 metallic spokes each 1 m long is rotated with a speed of 120 rpm in a plane perpendicular to a magnetic field of 0.4 G. The induced emf between the axle and rim of the wheel will be, (1 G =  $10^{-4}$  T)

- (1)  $2.51 \times 10^{-4}$  V              (2)  $2.51 \times 10^{-5}$  V              (3)  $4.0 \times 10^{-5}$  V              (4) 2.51 V

Ans: (1)

Sol:  $\varepsilon = \frac{1}{2} B \omega r^2$

$$\varepsilon = \frac{1}{2} \times (0.4 \times 10^{-4}) \times \left( 2\pi \left[ \frac{120}{60} \right] \right) (1)^2$$

$$\varepsilon = 0.8 \pi \times 10^{-4}$$

$$\varepsilon = 2.512 \times 10^{-4} \text{ Volt}$$

Q.167 An ideal gas equation can be written as  $P = \frac{\rho RT}{M_0}$  where  $\rho$  and  $M_0$  are respectively,

- (1) mass density, mass of the gas                      (2) number density, molar mass  
(3) mass density, molar mass                      (4) number density, mass of the gas

Ans: (3)

Sol:  $PV = nRT$

$$\Rightarrow P = \frac{1}{V} \cdot \frac{m}{M_0} \cdot RT$$

$$= \left( \frac{m}{V} \right) \left( \frac{RT}{M_0} \right)$$

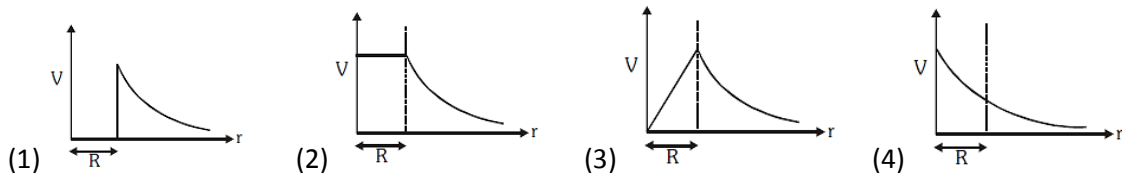
$$\Rightarrow P = \frac{\rho RT}{M_0}$$

$$\rho = \frac{m}{V} = \text{mass density}$$

$$M_0 = \text{molar mass}$$

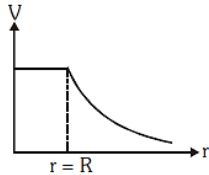


Q.168 The variation of electrostatic potential with radial distance  $r$  from the centre of a positively charged metallic thin shell of radius  $R$  is given by the graph



Ans: (2)

Sol:  $V_{in} = V_s = \frac{KQ}{R}$  and  $V_{out} = \frac{KQ}{r}$  ( $r > R$ )



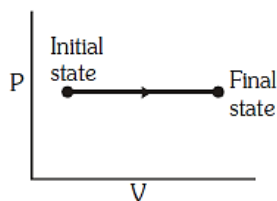
Q.169 Which of the following gate is called universal gate?

- (1) OR gate                      (2) AND gate                      (3) NAND gate                      (4) NOT gate

Ans: (3)

Sol: NAND gate and NOR gate are universal logic gates.

Q.170 The P-V diagram for an ideal gas in a piston cylinder assembly undergoing a thermodynamic process is shown in the figure. The process is



- (1) adiabatic                      (2) isochoric                      (3) isobaric                      (4) isothermal

Ans: (3)

Sol:  $P = \text{constant} \Rightarrow$  Isobaric process.

Q.171 The power of a biconvex lens is 10 dioptre and the radius of curvature of each surface is 10 cm. Then the refractive index of the material of the lens is,

- (1)  $\frac{4}{3}$                       (2)  $\frac{9}{8}$                       (3)  $\frac{5}{3}$                       (4)  $\frac{3}{2}$

Ans: (4)

Sol:  $P = \frac{100}{f} \Rightarrow f = \frac{100}{P} = \frac{100}{10} = 10 \text{ cm}$

$f = \frac{R}{2(\mu-1)}$  (for equiconvex lens)

$$10 = \frac{10}{2(\mu-1)}$$

$$(\mu-1) = \frac{1}{2} \Rightarrow \mu = \frac{1}{2} + 1 = \frac{3}{2}$$

Q.172 An intrinsic semiconductor is converted into n-type extrinsic semiconductor by doping it with :-

- (1) Phosphorous                      (2) Aluminium                      (3) Silver                      (4) Germanium

Ans: (1)

Sol: For N type semi-conductor intrinsic semiconductor doped by pentavalent impurity.

- Q.173 A barometer is constructed using a liquid (density =  $760 \text{ kg/m}^3$ ). What would be the height of the liquid column, when a mercury barometer reads  $76 \text{ cm}$  ?  
 (density of mercury =  $13600 \text{ kg/m}^3$ )  
 (1)  $1.36 \text{ m}$                       (2)  $13.6 \text{ m}$                       (3)  $136 \text{ m}$                       (4)  $0.76 \text{ m}$

Ans: (2)

Sol:  $76 \text{ cm} \times \rho_{\text{Hg}} \times g = h \times \rho_L \times g$

$$h = 76 \text{ cm} \times \frac{\rho_{\text{Hg}}}{\rho_L}$$

$$= 76 \text{ cm} \times \frac{13600}{760}$$

$$= 13.6 \text{ m}$$

- Q.174 A wire of length  $L$  metre carrying a current of  $I$  ampere is bent in the form of a circle. Its magnetic moment is,  
 (1)  $I L^2 / 4 \text{ A m}^2$                       (2)  $I \pi L^2 / 4 \text{ A m}^2$                       (3)  $2 I L^2 / \pi \text{ A m}^2$                       (4)  $I L^2 / 4\pi \text{ A m}^2$

Ans: (4)

Sol:  $2\pi r = L$

$$r = \frac{L}{2\pi}$$

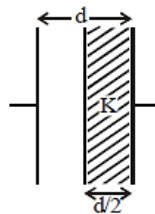
$$M = I (A)$$

$$M = I (\pi r^2)$$

$$M = I (\pi) \left( \frac{L}{2\pi} \right)^2$$

$$M = \frac{I L^2}{4\pi}$$

- Q.175 A parallel plate capacitor having cross-sectional area  $A$  and separation  $d$  has air in between the plates. Now an insulating slab of same area but thickness  $d/2$  is inserted between the plates as shown in figure having dielectric constant  $K (= 4)$ . The ratio of new capacitance to its original capacitance will be,



- (1)  $2 : 1$                       (2)  $8 : 5$                       (3)  $6 : 5$                       (4)  $4 : 1$

Ans: (2)

Sol:  $C_a = \frac{\epsilon_0 A}{d}$

$$C_k = \frac{\epsilon_0 A}{d - t + \frac{t}{k}}$$

$$C_k = \frac{\epsilon_0 A}{d - \frac{d}{2} + \frac{d}{8}}$$

$$C_k = \frac{8 \epsilon_0 A}{5 d}$$

$$C_k = \frac{8}{5} C_a$$

$$\frac{C_k}{C_a} = \frac{8}{5}$$

Q.176 What is the depth at which the value of acceleration due to gravity becomes  $1/n$  times the value that at the surface of earth? (radius of earth = R)

- (1)  $R/n^2$                       (2)  $R(n-1)/n$                       (3)  $Rn/(n-1)$                       (4)  $R/n$

Ans: (2)

Sol: At depth :

$$g_{eff} = g \left(1 - \frac{d}{R}\right)$$

$$\frac{g}{n} = g \left(1 - \frac{d}{R}\right)$$

$$d = (n - 1) R/n$$

Q.177 Time intervals measured by a clock give the following readings :

1.25 s, 1.24 s, 1.27 s, 1.21 s and 1.28 s.

What is the percentage relative error of the observations ?

- (1) 2 %                      (2) 4 %                      (3) 16 %                      (4) 1.6 %

Ans: (4)

Sol: Mean of observation

$$= \frac{1.25+1.24+1.27+1.21+1.28}{5}$$

$$= 1.25 \text{ sec.}$$

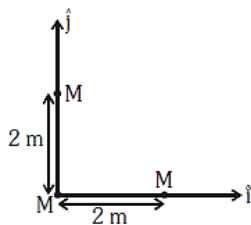
Mean of error

$$= \frac{0+0.01+0.02+0.04+0.03}{5}$$

$$= \frac{0.1}{5}$$

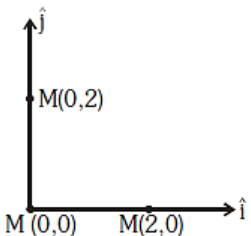
$$\%error = \frac{0.1 \times 100}{5 \times 1.25} = 1.6\%$$

Q.178 Three identical spheres, each of mass M, are placed at the corners of a right angle triangle with mutually perpendicular sides equal to 2 m (see figure). Taking the point of intersection of the two mutually perpendicular sides as the origin, find the position vector of centre of mass.



- (1)  $2(\hat{i} + \hat{j})$                       (2)  $(\hat{i} + \hat{j})$                       (3)  $\frac{2}{3}(\hat{i} + \hat{j})$                       (4)  $\frac{4}{3}(\hat{i} + \hat{j})$

Ans: (3)



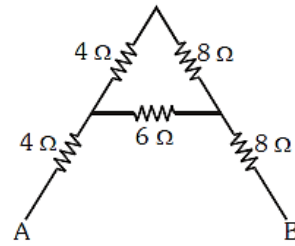
Sol:

$$x_{com} = \frac{M \times 0 + M \times 2 + M \times 0}{3M} = \frac{2}{3}$$

$$y_{com} = \frac{M \times 0 + M \times 2 + M \times 0}{3M} = \frac{2}{3}$$

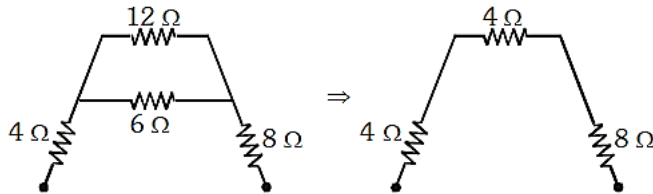
$$\text{Position vector} = \frac{2}{3}\hat{i} + \frac{2}{3}\hat{j}$$

Q.179 The equivalent resistance between A and B for the mesh shown in the figure is



- (1)  $7.2 \Omega$                       (2)  $16 \Omega$                       (3)  $30 \Omega$                       (4)  $4.8 \Omega$

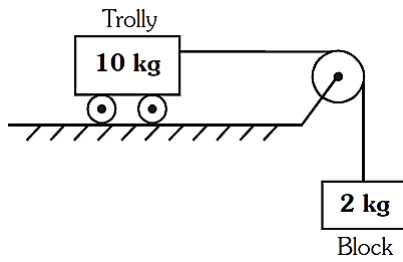
Ans: (2)



$$R_{AB} = 16 \Omega$$

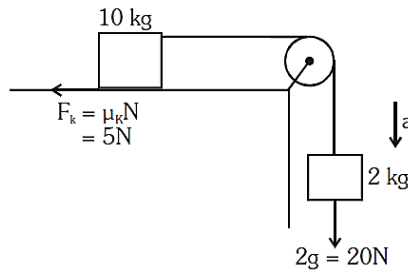
Sol:

Q.180 Calculate the acceleration of the block and trolley system shown in the figure. The coefficient of kinetic friction between the trolley and the surface is 0.05. ( $g = 10 \text{ m/s}^2$ , mass of the string is negligible and no other friction exists).



- (1)  $1.25 \text{ m/s}^2$                       (2)  $1.50 \text{ m/s}^2$                       (3)  $1.66 \text{ m/s}^2$                       (4)  $1.00 \text{ m/s}^2$

Ans: (1)



Sol:

$$a = \frac{20-5}{12} = 1.25 \text{ m/s}^2$$